

Name of the candidate

Reg. No. (To be filled by the Examiner)

Class I -25 F1

Maximum Marks:100

Time: 90 Minutes

To the Examiner

- 1.Read out the first question to all candidates.
- 2.Explain how to mark the answer.
- 3.Give the candidates enough time to answer the question.
- 4.When they have answered it, read out the next question and ask them to answer it.
- 5.Continue this process till the last question.
- 6.All the answers are to be marked by the candidates themselves.


Question 1: Look at the given pictures and answer the questions.

Put a tick (✓) mark in the box below the correct picture: (5x2=10)

a) Which one among the following lives in a tree?




b) Where do we go when we are sick?




c) Which one among the following is used for space travel?







d) Which of the following fruits has only one seed?



e) Which of the following is the kitchen?



Question 2. Look at the pictures. Rearrange the letters given in the boxes to get their names: (4x3=12)

a)		MTTAOO	
b)		TROARP	
c)		BZREA	
d)		RBOAINW	




Question 3. Match the animals in column ‘A’ with their babies in column ‘B’: (4x2=8)

A	B
a) Cat	Cub
b) Hen	Calf
c) Cow	Chick
d) Bear	Kitten

Question 4. Fill in the blanks with the article ‘a’ or ‘an’: (2x2=4)

- a) _____ ice cream
- b) _____ monkey

Question 5. Look at each picture. Write the names of the actions in the boxes below: (4x2=8)

a)		b)		c)		d)	

Question 6. Identify the sense organs and write their names. Choose the correct word from the box: (4x2=8)

Hear Smell See Taste




a)



b)



c)



d)

Question 7. Look at the calendar and answer the questions: (2x3=6)

March						2024
Su	Mo	Tu	We	Th	Fr	Sa
					1	2
3	4	5	6	7	8	9
10	11	12	13	14	15	16
17	18	19	20	21	22	23
24	25	26	27	28	29	30
31						

a) How many Sundays are there in March 2024?

.....

b) What is the date of the second Saturday in March 2024?

.....

Question 8. Write the number names of the given numbers in the boxes below each: (4x3=12)

25	37	22	36

Question 9. Draw the hour hand and minute hand on the clock face to show 4 o' clock: (1x2=2)



Question 10. Fill in the blanks with the suitable words from the box:
(5x2=10)









round	hands	money	dentist	kitchen
-------	-------	-------	---------	---------

- a) We find fingers in our _____ .
- b) Food is cooked in the _____ .
- c) On a full moon day the shape of the moon will be _____ .
- d) Bank helps us to keep our _____ safe.
- e) When you have toothache, you go to a _____ .


Question 11. Write the next two numbers and complete the series below:
(2x3= 6)

- a) 35, 34, 33,,
- b) 10, 15, 20,,

Question 12. Find the odd one among the following in each row:
Put a tick (✓) mark in the box below the correct picture: (2x2=4)

a)				
b)				

Question 13. Look at the picture of the plant. Complete the picture and colour it.
(1x10=10)



Name of the invigilator.....	Signature.....
------------------------------	----------------